


Name: Enrolment No:	
--------------------------------------	--

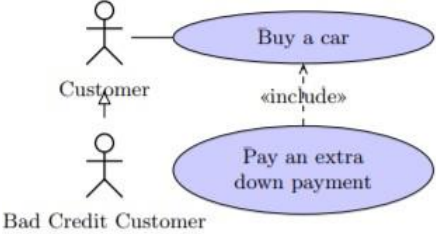
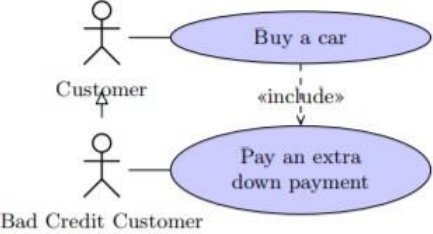
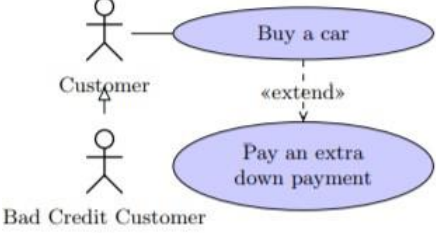
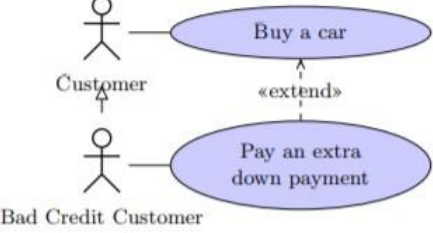
UNIVERSITY OF PETROLEUM AND ENERGY STUDIES
End Semester Examination, May 2023

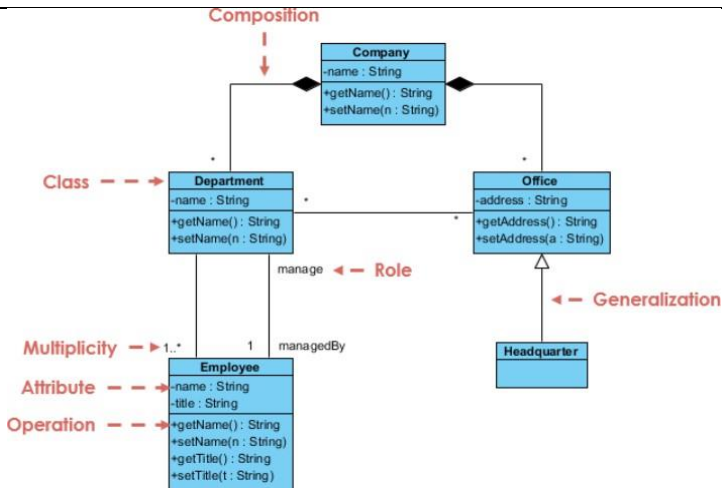
Course: BCA
Program: Object Oriented Analysis and Design
Course Code: CSBC1013

Semester : 2
Time : 03 hrs.
Max. Marks: 100

Instructions: Attempt all questions

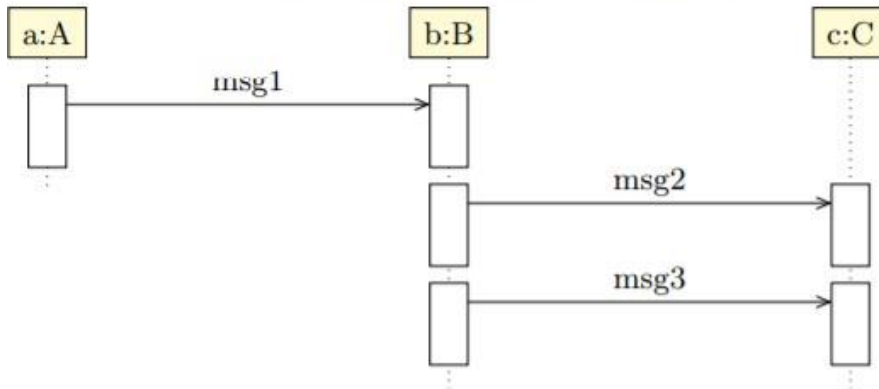
SECTION A
(5Qx4M=20Marks)

S. No.		Marks	CO
Q 1	<p>Read the following description. “Customers of the garage can buy cars. Customers with a bad credit should pay an extra down payment”. Which of the following diagrams represent this description?</p> <div style="display: flex; justify-content: space-around;"> <div style="text-align: center;">  <p>a)</p> </div> <div style="text-align: center;">  <p>b)</p> </div> </div> <div style="display: flex; justify-content: space-around; margin-top: 20px;"> <div style="text-align: center;">  <p>c)</p> </div> <div style="text-align: center;">  <p>d)</p> </div> </div>	4	CO1
Q2.	<p>Identify the incorrect statement(s) for above class diagram:</p> <ul style="list-style-type: none"> a) A company consists of departments b) Departments are located in one or more offices. c) One office acts as a headquarter d) Each department has a manager who is recruited from the set of employees e) Headquarter class can't exist without Company class f) "manage" is a stereotype 	4	CO2



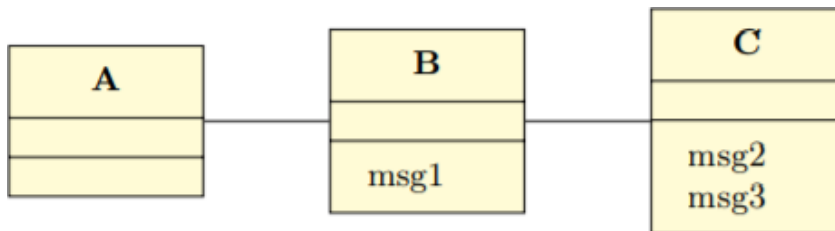
Q3

Consider the following sequence diagram.

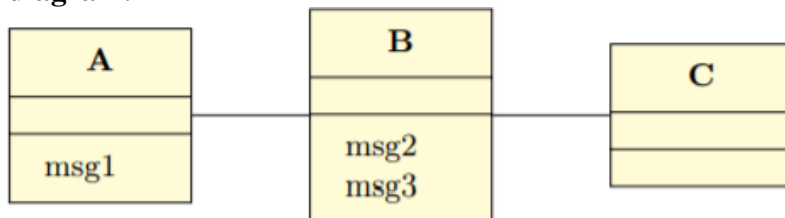


Identify the incorrect statements:

Statement 1: The class diagram below is consistent with the sequence diagram



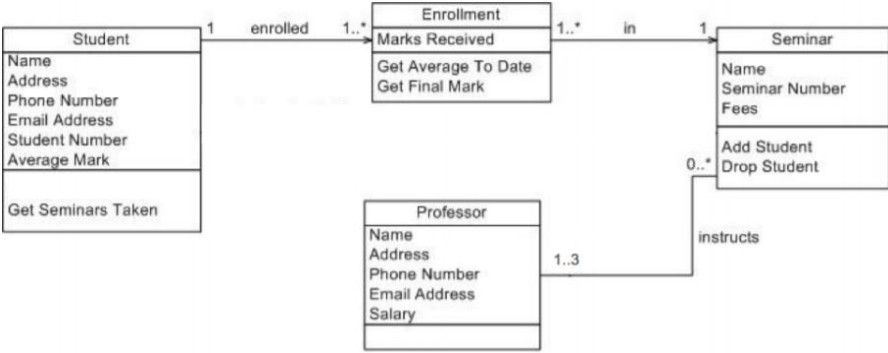
Statement 2: The class diagram below is consistent with the sequence diagram.



Statement 3: Message msg2 is received before msg3 has been sent.

4

CO3

	Statement 4: Message msg2 is sent after msg1 has been received.		
Q4	<p>On February 21, 2014 user Ettozyame has asked the following question on the popular Q&A site StackOverflow: “I want to know in detail about the difference between alt and opt fragment in sequence diagram, they seem similar, I can’t distinguish them. Anyone knows about this thing?” Which of the following statements are correct?</p> <p>Statement 1: alt is used to described alternative scenarios. Only one of the options will be executed. opt is used to describe an optional step.</p> <p>Statement 2: alt is more used for several choices, like a switch, while with opt code will be executed or not.</p> <p>Statement 3: an opt fragment cannot be enclosed in other combined fragments such as strict or par, while alt can be enclosed in such fragments.</p> <p>Statement 4: an alt fragment cannot be enclosed in other combined fragments such as strict or par, while opt can be enclosed in such fragments.</p>	4	CO4
Q5	<p>Identify the correct statements:</p> <p>a) Student is the parent class for Enrollment & enrollment is a parent class for Seminar</p> <p>b) A Student can have no enrollment at all</p> <p>c) A Student can participate in more than 1 Seminar</p> <p>d) It is compulsory for a Professor to instruct a Seminar</p> <p>e) none</p>  <pre> classDiagram class Student { Name Address Phone Number Email Address Student Number Average Mark Get Seminars Taken() } class Enrollment { Marks Received Get Average To Date Get Final Mark } class Seminar { Name Seminar Number Fees Add Student Drop Student } class Professor { Name Address Phone Number Email Address Salary } Student "1" -- "1..*" Enrollment : enrolled Enrollment "1..*" -- "1" Seminar : in Professor "1..3" -- "0..*" Seminar : instructs </pre>	4	CO5
SECTION B (4Qx10M= 40 Marks)			
Q6	<p>a) Define Aggregation and Composition.</p> <p>b) What is the use of System sequence diagram?</p> <p>c) Briefly explain the different phases of Unified Process.</p>	10	CO3
Q7	“RUP is not considered particularly agile”. Elaborate and justify.	10	CO2
Q8	<p>a) Explain the use of a component diagram.</p> <p>b) What do you understand by Event, State and Transition?</p>	10	CO4, CO5

Q9	Describe Collaboration or Deployment diagram with an example.	10	CO1
SECTION-C (2Qx20M=40 Marks)			
Q10	<p>a) What is the relationship between sequence diagrams and use cases? Take an example to show the relationship, highlighting the advantages.</p> <p>b) For an atm system, every user has to be validated with a PIN number to make a transaction. A customer is allowed three times to validate card giving the correct PIN number. Show the representation for the same elaborate the 'validate user' use case using a sequence diagram</p>	20	CO4, CO5
Q11	<p>Draw the Activity diagram for following specification:</p> <p>A coffee vending machine dispenses coffee to customers. Customers order coffee by selecting a recipe from a set of recipes. Customers pay for the coffee using coins. Change is given back, if any, to the customers. The "Service staff" loads ingredients (coffee powder, sugar, milk, water, chocolate) into the coffee machine. The "Service staff" can also add a recipe by indicating the name of the coffee, the units of coffee powder, milk, sugar, water and chocolate to be added as well as the cost of the coffee.</p> <p style="text-align: center;">OR</p> <p>Prepare a USE CASE diagram for any Smart Irrigation System.</p>	20	CO2