

Name:

Enrolment No:



UPES

End Semester Examination, May 2024

Course: Diagnostic Microbiology

Semester : IV

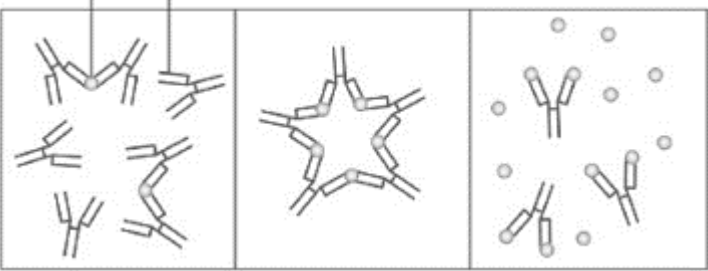
Program: BSc. Microbiology

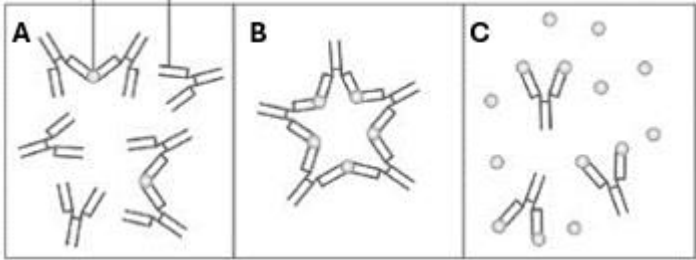

Duration : 3 hours


Course Code: HSMB2025

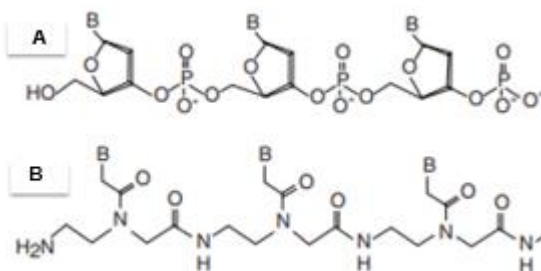
Max. Marks: 100

Instructions:

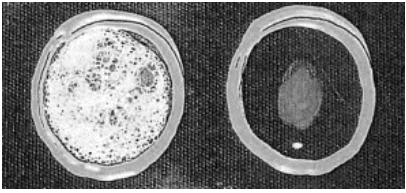
S. No.	Section A Short answer questions/ MCQ/T&F (20Qx1.5M= 30 Marks)	Marks	COs
Q 1	Which of the following works the best for bacterial microscopy? a. 40X oil objective b. 100X oil objective c. 40X dry objective d. Any oil objective	1.5	CO2
Q 2	Name an enzymatic test to distinguish between aerobic and anaerobic organism.	1.5	CO2
Q 3	Which pathogen can be detected using Kinyoun acid-fast stain?	1.5	CO2
Q 4	Define thrombocytopenia.	1.5	CO1
Q 5 and are fluorescent dyes used in diagnostic microbiology.	1.5	CO1
Q 6	What is Mc Conkey agar?	1.5	CO1
Q 7	Microbial count should be higher in florescent microscopy than in light microscopy. Comment on the statement.	1.5	CO2
Q 8	Identify the test shown below? 	1.5	CO2
Q 9	Differentiate the three zones A, B and C by writing what they refer to.	1.5	CO2

			
Q 10	Name two commonly used media for culturing fungus.	1.5	CO1
Q11	<p>A compound microscope allows clear visualization of objects no smaller than a:</p> <ol style="list-style-type: none"> DNA molecule Typical virus Large protozoa Small bacterium Human cells 	1.5	
Q12	<p>Identify the crucial label below?</p> 	1.5	CO2
Q13	‘There were 1000 measles cases aged 15-50 year old in 2019 in the US.’ Comment what does 1000 cases refer to here as Incidence or Prevalence.	1.5	CO2
Q14	‘Are fomites vehicle or vectors of diseases.’ Comment on the statement.	1.5	CO2
Q15	<p>Identify the microscopy which is suitable for <i>Treponema pallidum</i>.</p> <ol style="list-style-type: none"> Bright field microscopy Electron microscopy Dark field microscopy Negative field microscopy 	1.5	CO1
Q16	<p>In an attempt to culture from a specimen; one finds growth on pH lower than neutral and on a starch media. Detect the pathogen which is likely to grow:</p> <ol style="list-style-type: none"> Bacteria Viruses Fungus Protozoa 	1.5	CO1
Q17	Alcohol is an anti-septic which can be used to clean surfaces as well as hands and arms. Identify the microbe against which it will work well or more efficiently	1.5	CO1

	A. Influenza virus B. Adenovirus C. Picorna virus D. Reoviruses		
Q18	‘Are Viruses culturable?’ Comment on the statement.	1.5	CO1
Q19	Name an automated instrument for bacterial identification and antibiogram pattern.	1.5	CO1
Q20	Differentiate between a probe and a primer.	1.5	CO2
Section B (4Qx5M=20 Marks)			
Q 1	Identify the technique below and elaborate how such kits work? 	5	CO2
Q 2	a. From the above question Q1, can you envision difference between ELISA and this assay? (2) b. Discuss what are the analyte/(s) or molecule/(s) that can be detected using such kits and ELISA? (2) c. Write the full form of ELISA. (1)	1.5	CO1
Q 3	a. Enlist the specimens in which you would suspect normal microflora of body to be present? (2) b. Elaborate the principle of an Indole test?	5	CO2
Q 4	Write the procedure of WIDAL test used in diagnosis of typhoid. What kind of test is it?	5	CO1
Section C (2Qx15M=30 Marks)			
Q 1	A few microlitres of patient sample is given and one wishes to apply a sensitive test to detect a pathogen. (i) Pick the method that should be preferred and why? (2) a. Biochemical b. Culture c. Molecular methods d. Microscopy (ii) Discuss the principle of hybridization. (3) (iii) If you have to culture the pathogen from this sample; suggest the precautions that will you take? (2) (iv) Define transport media? Enlist some and write composition of at least one. (2+3) (v) Enlist the transport media works the best for Vibrio? OR which is the most commonly used transport media for bacteria. (1) (vi) Differentiate between nosocomial infection and opportunistic infection. (2)	15 (2+3+2+5+1+2)	CO2

<p>Q 2</p>	<p>Hybridization techniques are rampant and used in multiple format in diagnostic microbiology. Below are two types of hybridization polymers; identify them, label them and answer the following.</p> <div style="text-align: center;">  </div> <ol style="list-style-type: none"> Label the probes A and B, highlight the difference between them. Analyse which of these would be more suitable to use for hybridization and why? Given the sequence '5 – ATTTCCCGCGCGUA – 3'. Design a hybridization probe for it. Elaborate the steps involved in hybridization. Elaborate some molecular methods of detection of microbes? Explain any one. 	<p>15 (2+2+2+3+6)</p>	<p>CO2</p>
-------------------	--	----------------------------------	-------------------

Section D
(2Qx10M=20 Marks)

<p>Q 1</p>	<p>Write in detail the principle, SOP/procedure of any one test for detection of viruses. What controls would you take to ensure your test is accurate.</p>	<p>10 (6+4)</p>	<p>CO1</p>
<p>Q 2</p>	<p>Discuss the principle of the following tests or identify the given test in picture and give examples of where they are used:</p> <ol style="list-style-type: none"> Oxidase test Identify the test below and write its principle. <div style="text-align: center;">  </div> <ol style="list-style-type: none"> Differentiate between precipitation and flocculation tests. <p style="text-align: center;">OR</p> <p>Differentiate between PCR and q-RT PCR.</p>	<p>10 (2+3+5)</p>	<p>CO1</p>